







1.   
 $5 + 5 = 10$


2.   
 $3 + 3 = 6$


3.   
 $3 + 3 = 6$


4.   
 $3 + 3 = 6$


5.   
 $1 + 1 = 2$

6.   
 $4 + 4 = 8$


7.   
 $4 + 4 = 8$


8.   
 $1 + 1 = 2$


9.   
 $1 + 1 = 2$


10.   
 $3 + 3 = 6$


11.   
 $3 + 3 = 6$


12.   
 $3 + 3 = 6$


13.   
 $5 + 5 = 10$

14.   
 $4 + 4 = 8$

15.   
 $1 + 1 = 2$

16.   
 $4 + 4 = 8$

17.   
 $1 + 1 = 2$

18.   
 $4 + 4 = 8$